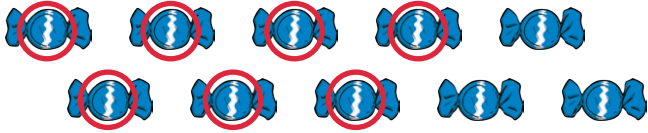


One More and One Less Groups up to 8


Can you find 1 more and 1 less?

Example:




I have 6 sweets. Show me 1 more. 1 more than 6 is 7.

1.




I have 5 coins. Show me 1 less. 1 less than 5 is _____

2.



I have 5 flowers. Show me 1 more. 1 more than 5 is _____

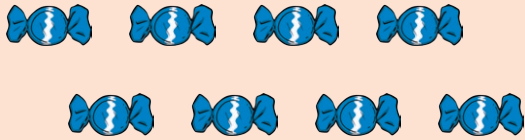
3.



I have 1 cake. Show me 1 more. 1 more than 1 is _____


One More and One Less Groups up to 8

4.




I have 7 sweets. Show me 1 less. 1 less than 7 is _____

5.




I have 3 balls. Show me 1 less. 1 less than 3 is _____

6.



I have 6 bees. Show me 1 less. 1 less than 6 is _____

7.



I have 4 apples. Show me 1 more. 1 more than 4 is _____


One More and One Less Groups up to 8

8.




I have 4 stars. Show me 1 less. 1 less than 4 is _____

9.



I have 8 pairs of socks. Show me 1 less. 1 less than 8 is _____

10.



I have 3 teddy bears. Show me 1 more. 1 more than 3 is _____

One More and One Less Groups up to 8 - Answers

1.



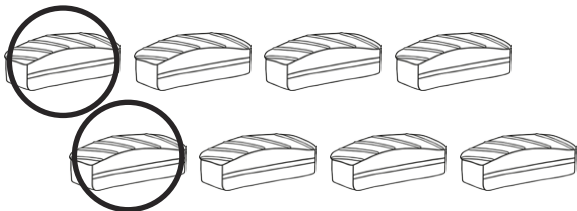
I have 5 coins. Show me 1 less. 1 less than 5 is **4**.

2.



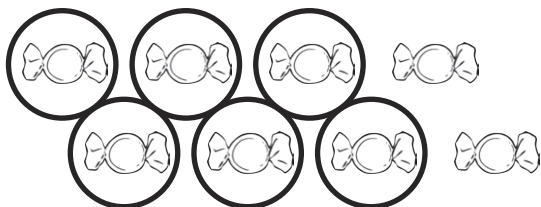
I have 5 flowers. Show me 1 more. 1 more than 5 is **6**.

3.



I have 1 cake. Show me 1 more. 1 more than 1 is **2**.


4.



I have 7 sweets. Show me 1 less. 1 less than 7 is **6**.

One More and One Less Groups up to 8 - Answers

5.




I have 3 balls. Show me 1 less. 1 less than 3 is **2**.

6.




I have 6 bees. Show me 1 less. 1 less than 6 is **5**.

7.



I have 4 apples. Show me 1 more. 1 more than 4 is **5**.

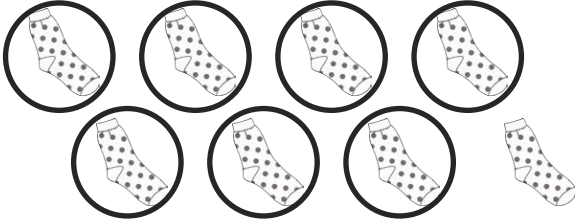
8.



I have 4 stars. Show me 1 less. 1 less than 4 is **3**.


One More and One Less Groups up to 8 - Answers

9.



I have 8 pairs of socks. Show me 1 less. 1 less than 8 is **7**.

10.



I have 3 teddy bears. Show me 1 more. 1 more than 3 is **4**.